

LOS ÁNGULOS

ESTUDIA

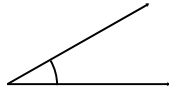
ÁNGULO AGUDO: mide menos de 90°

ÁNGULO RECTO: mide 90°

ÁNGULO OBTUSO: mide más de 90°

Escribe cómo se llaman estos ángulos.

1.




2.



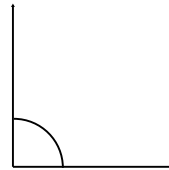
3.



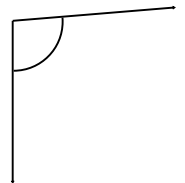
4.



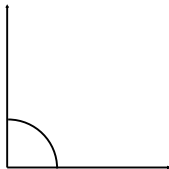
5.



6.



7.



8.



9.